

FUKIEN SECONDARY SCHOOL
S1 First Term Uniform Test (2021-2022)
History
(45 minutes)

Date: 10th November 2021
Time: 8:30 a.m. - 9:15 a.m.

Name: _____
Class: _____ No.: _____

Instructions to Candidates:

1. The full mark of this paper is 70.
 2. Write **ALL** answers on the answer sheets provided.
 3. Hand in both the question paper and the answer sheets at the end of the test.
-

Part A Multiple Choice Questions (5 marks)

Choose the best answers.

1. How do historians divide history into 'prehistoric times' and 'historic times'?
 - A. The division is based on the areas of human activities.
 - B. The division is based on the development of human body.
 - C. The division is based on the date when writing was invented.
 - D. The division is based on the date of the birth of Jesus Christ.
2. Which of the following descriptions about the Christian calendar is *incorrect*?
 - A. BC refers to the period before the birth of Jesus Christ.
 - B. AD refers to the period after the birth of Jesus Christ.
 - C. For measuring time in BC, the bigger the number, the further away an event is from the present.
 - D. For measuring time in AD, the bigger the number, the further away an event is from the present.
3. Arrange the following years in chronological order.
 - i. AD 850
 - ii. 800 BC
 - iii. 95 BC
 - iv. AD 15
 - A. i, ii, iv, iii
 - B. ii, iii, iv, i
 - C. iii, ii, iv, i
 - D. iv, iii, ii, i

4. Which of the following marked the end of the Stone Age?
- The Stone Age people learned how to farm.
 - The Stone Age people learned how to make fire.
 - The Stone Age people learned how to make tools from metal.
 - The Stone Age people learned how to build houses.
5. Which of the following was *not* the reason why the early people settled in river valleys?
- The infertile land in river valleys favoured farming.
 - Rivers provided water for drinking.
 - Rivers provided water for irrigation.
 - People could hunt animals that came to rivers to drink water.

Part B Fill in the Blanks (5 marks)

Fill in the blanks with the words provided in the boxes below.

Fertile Crescent Civilization	Dramatic
History	Africa
Nomadic	Romans
Nile Valley Civilization	Asia
Sumerians	Legends

- _____ (a) _____ refers to the record and study of past human events.
- The earliest people appeared in _____ (b) _____ more than four million years ago.
- Around 4000 BC, the _____ (c) _____ invented the world's first writing and created the earliest civilization.
- _____ (d) _____ lifestyle means humans moved from place to place in search of food.
- _____ (e) _____ was the earliest ancient civilization in human history.




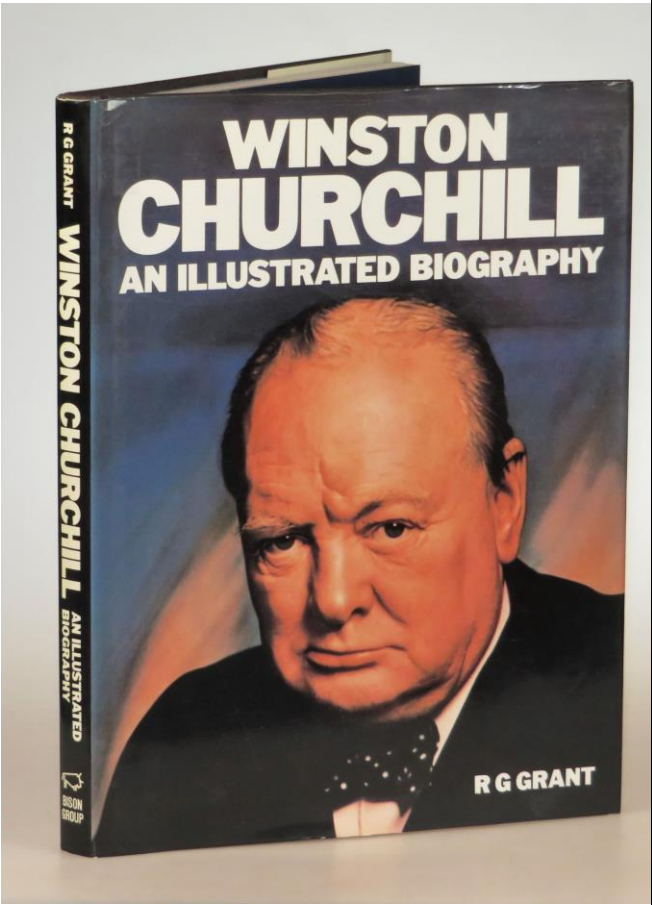
Part C Calculating centuries (10 marks)

Fill in the table with the correct centuries on the answer sheets.

1. 1814	2. 2000
3. 65 BC	4. 738 BC
5. 1251	

Part D Classification (6 marks)

Classify the following items into different types of sources. Write A to F in the table provided on the answer sheets.

<p>A.</p>  <p>An Egyptian mummy in history museum</p>	<p>B.</p>  <p>St. Peter's Basilica in Italy</p>
<p>C.</p>  <p>A newspaper published in 1984</p>	<p>D.</p>  <p>A biography of the British Prime Minister during the Second World War - Winston Churchill</p>

E.



A movie about the Pearl Harbour Incident in 1941

F.



A photo of Mr TUNG Chee-hwa, the 1st Chief Executive of the Hong Kong Special Administrative Region

Part E Matching (5 marks)

Match Column A with Column B. Write down the correct letters on the answer sheets.

Column A (Name of the early people)	Column B (Origin of the early people)
1. Lantian Man	i. France
2. Neanderthal Man	ii. Indonesia
3. Peking Man	iii. Zhoukoudian, China
4. Cro-Magnon Man	iv. Shaanxi, China
5. Java Man	v. Germany


Part F Data-based Questions (19 marks)

Answer *all* questions.

1. Study Sources A and B.

SOURCE A

The following cartoon shows the people living in the 2,500,000 BC to 10,000 BC.

**SOURCE B**

The following cartoon shows the people living in 10,000 BC to 4,000 BC.



- (a) Identify the Stone Age periods shown in Sources A and B. Explain your answer with reference to Sources A and B. (4 marks)
- (b) According to Source A, how did the people get food? (2 marks)
- (c) According to Source B, how did the people get food? (2 marks)
- (d) Did the people in Source A or Source B have more stable food supply? Explain your answer with reference to Sources A and B, and using your own knowledge. (4 marks)

2. Study Source C.

SOURCE C

The following passage was describing the factors for the rise of ancient civilizations.

During the Fertile Crescent civilization, the two rivers - Euphrates and Tigris provided them with a stable supply of water. It was used for drinking and irrigation. ... The Nile Valley had plenty of sunshine, and distinctive seasonal climates with wet summers, which provided excellent conditions for farming activities and contributed to the rise of ancient civilization. Archaeologists have also found bones of cattle, sheep and pigs there ... The Indus Valley was rich in fish, people caught them for food. ...

- (a) According to Source C, where did the people select to start the ancient civilizations? Explain your answer with reference to Source C. (4 marks)
- (b) Cite *one* clue from Source C to explain how climatic factor led to the rise of the ancient civilizations. (3 marks)

Part G Long Questions (20 marks)

In this part, the contents carry 18 marks and the format of presentation carries 2 marks. Students are required to use complete sentences to answer *all* questions.

1. Describe any *three* features of a civilized city. (9 marks)

2. Examine the background of the rise of ancient civilizations with reference to the *changes in modes of living, start of city lives* and *invention of writing*. (9 marks)

END OF PAPER