

FUKIEN SECONDARY SCHOOL
S1 First Term Uniform Test (2020-2021)
History
(45 minutes)

Date: 21st October 2020

Name: _____

Time: 8:30 a.m. - 9:15 a.m.

Class: _____ No.: _____

Instructions to Candidates:

1. The full mark of this paper is 70.
 2. Write **ALL** answers on the answer sheets provided.
 3. Hand in both the question paper and the answer sheets at the end of the test.
-

Part A Multiple Choice Questions (5 marks)

Choose the best answers.

1. History refers to the record and study of _____ events.
 - A. future
 - B. current
 - C. past
 - D. supernatural
2. Which of the following people is a historical figure?
 - A. Mickey Mouse
 - B. Batman
 - C. God of War Athena
 - D. Jesus Christ
3. One decade represents _____.
 - A. 10 years
 - B. 100 years
 - C. 1,000 years
 - D. 10,000 million years

4. Which of the following civilizations started first?

- A. The Indus Valley civilization
- B. The Fertile Crescent civilization
- C. The Nile Valley civilization
- D. The Huanghe Valley civilization

5. _____ and _____ were the most well-known buildings in ancient Egypt.

- A. Pyramids, hanging gardens
- B. Pyramids, temples
- C. Palaces, hanging gardens
- D. Palaces, temples

Part B Fill in the Blanks (5 marks)

Fill in the blanks with the words provided in the boxes below.

Africa	Asia	Chinese	Sumerians
Ancient Egyptians	4000 BC	2,500,000 BC	100,000,000 BC

- The Stone Age started in about (a) and ended in about (b).
- The (c) invented the world's first writing and created the earliest civilization.
- The Nile Valley refers to the large region of land surrounding the Nile in (d). The (e) and Kushites lived in the Nile Valley in ancient times.

Part C Calculating centuries (10 marks)



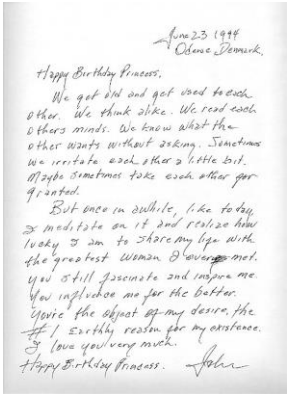



Fill in the table with the correct centuries on the answer sheets.

Example: 2017 = the 2nd decade of the 21st century

1. 2020	2. 793
3. 5 BC	4. 1465 BC
5. 200	

Part D Classification (6 marks)

Classify the following items into different types of sources. Write A to F in the table provided on the answer sheets.

<p>A.</p>  <p>A photo of first Chinese astronaut Yang Liwei</p>	<p>B.</p>  <p>A history textbook</p>
<p>C.</p>  <p>A letter written in 1994</p>	<p>D.</p>  <p>A documentary about the Second World War</p>
<p>E.</p>  <p>Dinosaur fossil</p>	<p>F.</p>  <p>A history project</p>

Part E Data-based Questions (21 marks)

Answer *all* questions.

1. Study Sources A to F.

SOURCE A

The handover of Hong Kong to China in AD 1997.

**SOURCE B**

People lived together in about 9000 BC.

**SOURCE C**


The birth of Jesus Christ in AD 1.

**SOURCE D**

T-Rex lived in the Cretaceous period in about 68,000,000,000 BC.

**SOURCE E**

Homo erectus existed as early as 1,900,000 years ago.





**SOURCE F**

The First World War broke out in AD 1914.



- (a) Which calendar is used in Sources A to F? (1 mark)
- (b) What are the meanings of 'BC' and 'AD' in the sources above? Explain your answer with reference to Source C and your own knowledge. (2 marks)
- (c) How do you divide prehistoric times and historic times? Explain your answer with reference to your own knowledge. (2 marks)
- (d) According to Sources A to F, identify whether the historical events happened in the prehistoric times or in the historic times. (3 marks)
- (e) Arrange the historical events in Sources A to F in chronological order. (3 marks)

2. Study Sources G to J.

<p>SOURCE G</p> <p>Ideograph of ancient Chinese people</p> 	<p>SOURCE H</p> <p>Cave painting of Stone Age people</p> 
<p>SOURCE I</p> <p>People hunted for food</p> 	<p>SOURCE J</p> <p>The Basic Law of the Hong Kong Special Administrative Region</p> 

- (a) Identify whether Sources G to J belonged to the early society or the civilized society. (4 marks)
- (b) What are the features of civilization? Explain any *three* features according to the Sources G to J, and using your own knowledge. (6 marks)

Part F Long Questions (23 marks)

In this part, the contents carry 20 marks and the format of presentation carries 3 marks. Students are required to use complete sentences to answer *all* questions.

1. What were the differences between the lives of people in the Old Stone Age and the New Stone Age? Explain your answer in terms of *getting food* and *settlement*. (8 marks)
2. Why did metal tools replace stone tools in early times? Explain any *three* reasons. (6 marks)
3. Explain any *three* geographical factors that favoured early people to live in river valleys. (6 marks)

END OF PAPER